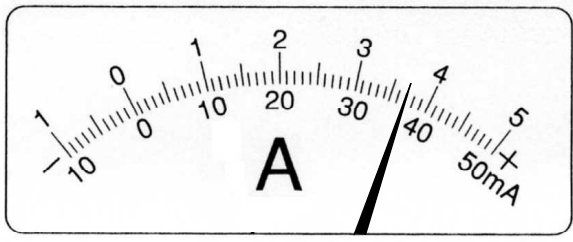


/	解説
/	9, 10

中2理科電流と電圧 NO3  
電流計と電圧計の読み方①

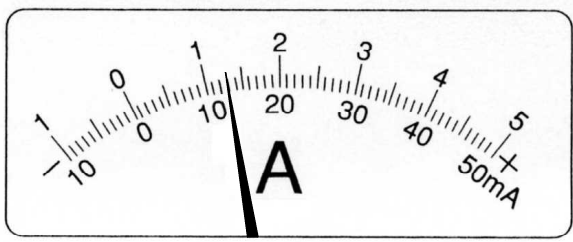
NAME	間違い

問題1



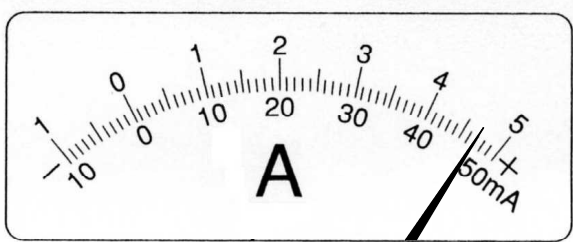
50mA      500mA      5A

--	--	--



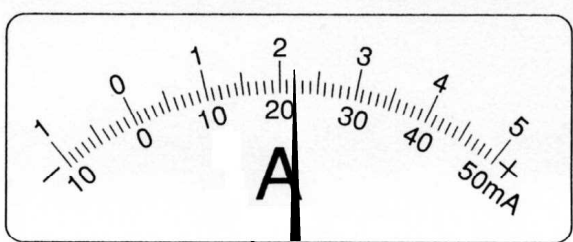
50mA      500mA      5A

--	--	--



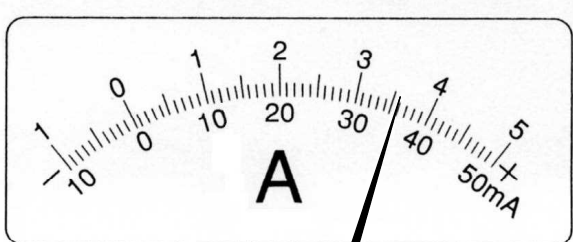
50mA      500mA      5A

--	--	--



50mA      500mA      5A

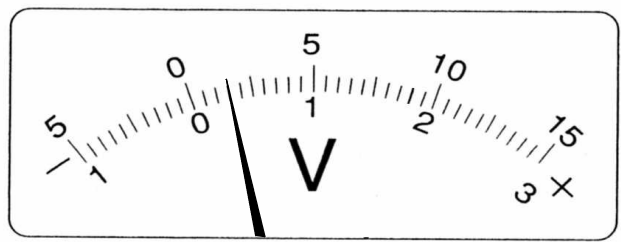
--	--	--



50mA      500mA      5A

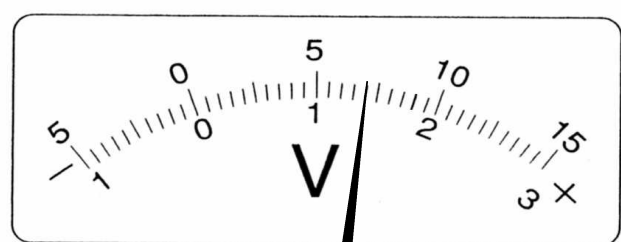
--	--	--

問題2



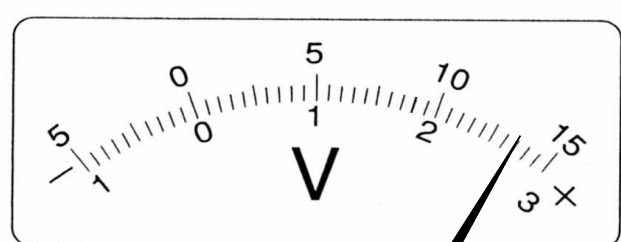
300V      15V      3V

--	--	--



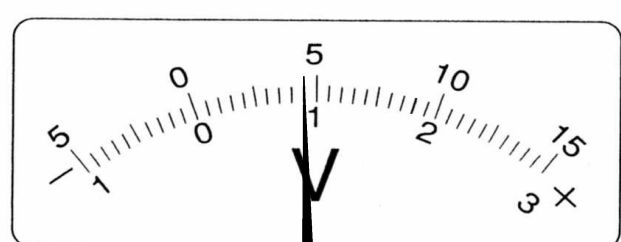
300V      15V      3V

--	--	--



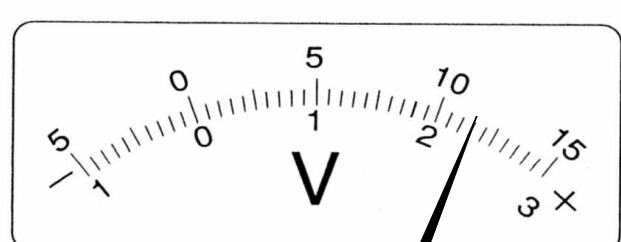
300V      15V      3V

--	--	--



300V      15V      3V

--	--	--



300V      15V      3V

--	--	--