

/	解説
/	問題に記載

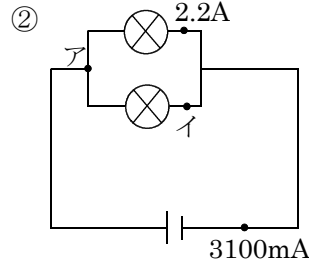
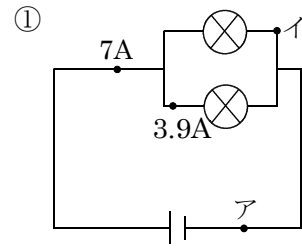
中2理科電流と電圧

オームの法則基本計算までの復習④

NAME	間違え

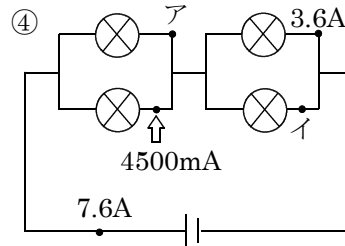
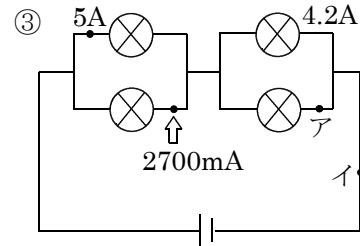
問1 次の電流、電圧を求めよ。

NO2,7



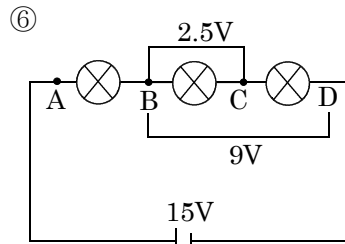
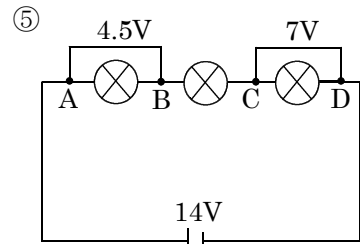
ア	イ
A	mA

ア	イ
A	mA



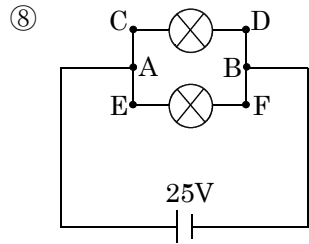
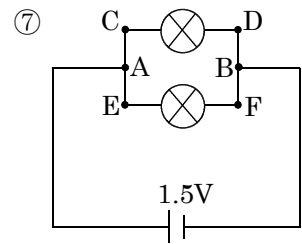
ア	イ
A	mA

ア	イ
A	mA



BC	AC	BD	AD
V	V	V	V

CD	AB	AC	AD
V	V	V	V

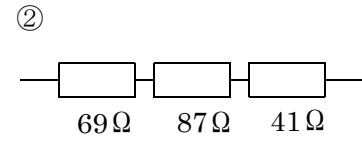
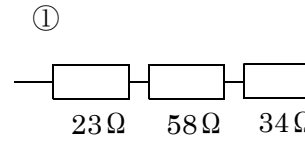


AB	CD	EF
V	V	V

AB	CD	EF
V	V	V

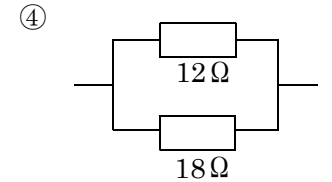
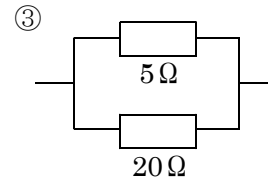
問2 次の合成抵抗を求めよ。

NO12



Ω

Ω

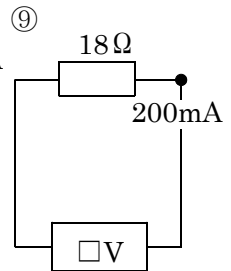
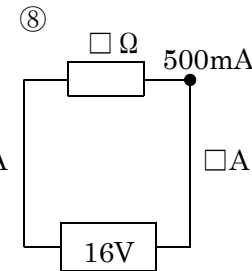
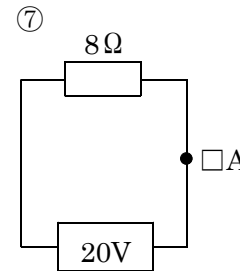


Ω

Ω

問3 次の電流・電圧・抵抗を求めよ。

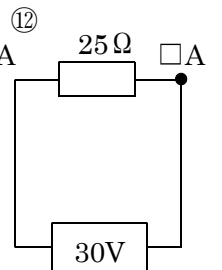
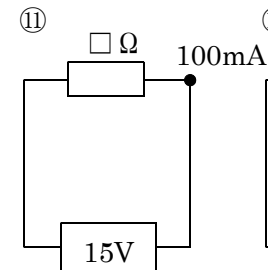
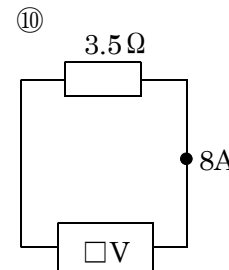
NO12



--

--

--

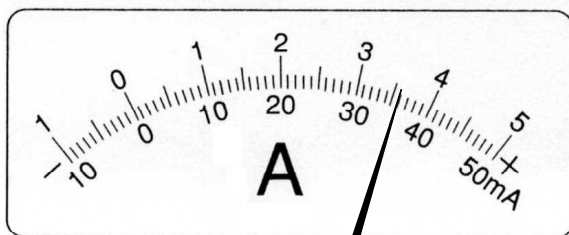


--

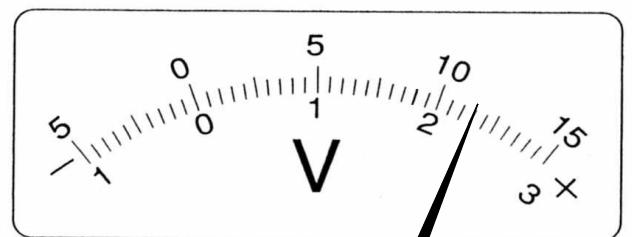
--

--

問4 次の電流計と電圧計の値を求めよ。 NO9,10



50mA	500mA	5A



300V	15V	3V