

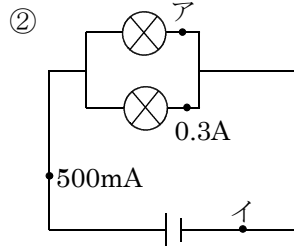
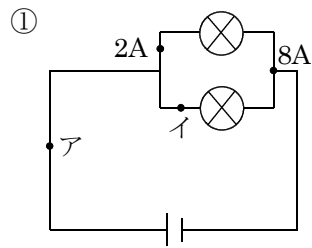
/	解説
/	問題に記載

中2理科電流と電圧

NAME	間違い

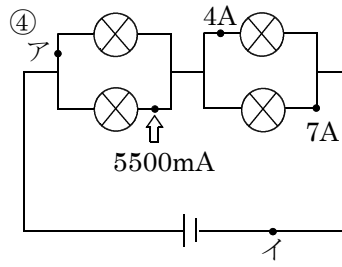
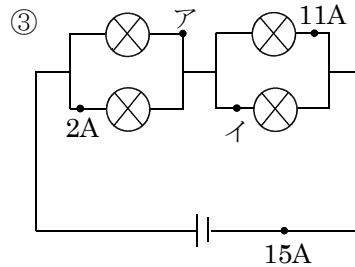
問1 次の電流、電圧を求めよ。

NO2,7



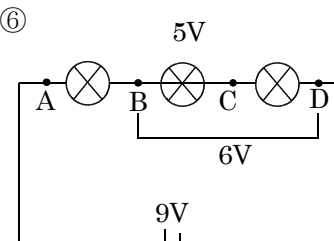
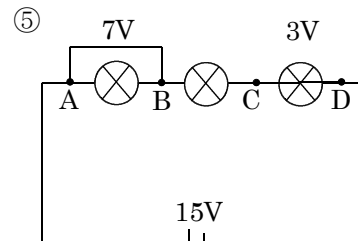
ア A イ mA

ア A イ mA



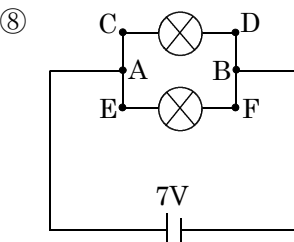
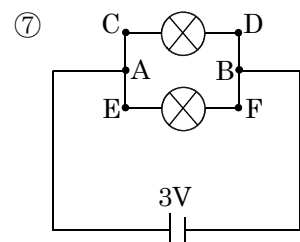
ア A イ mA

ア A イ mA



BC V AC V BD V AD V

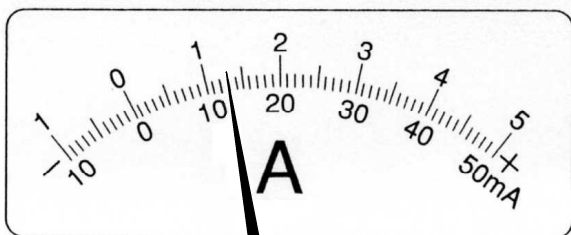
CD V AB V AC V AD V



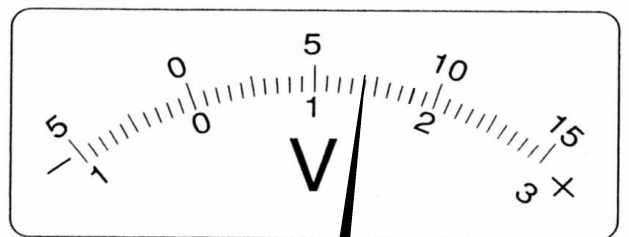
AB V CD V EF V

AB V CD V EF V

問4 次の電流計と電圧計の値を求めよ。 NO9,10



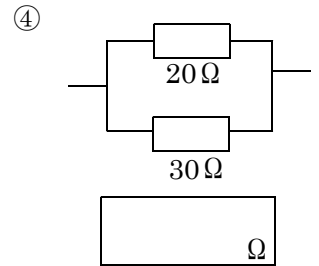
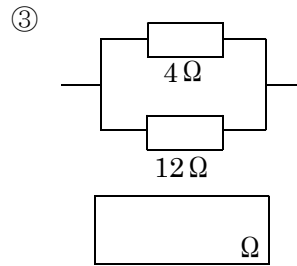
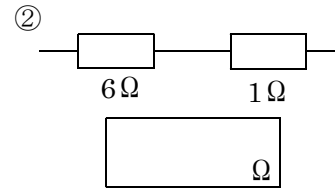
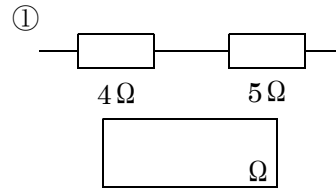
50mA 500mA 5A



300V 15V 3V

問2 次の合成抵抗を求めよ。

NO12



問3 次の電流・電圧・抵抗を求めよ。

NO12

