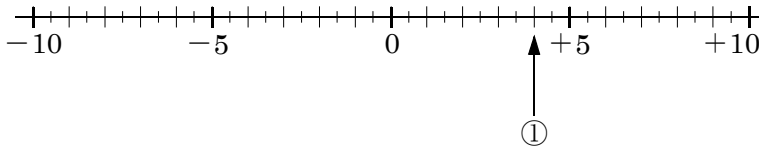


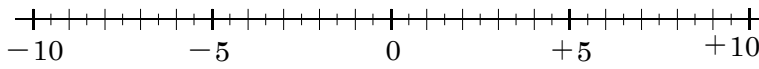
開始日	終了日	解説	中 1	正負の数 NO1 B	NAME	MISS
/	/	NO1				

問題1 次の数に対応する点を下の数直線上に矢印で表せ。

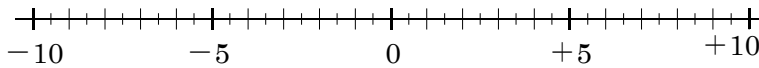
- (1) ① +4 ② -0.5 ③ +6.5 ④ -8



- (2) ① -3.5 ② -9.5 ③ +2.5 ④ +7.5

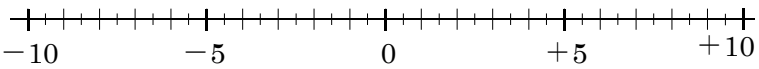


- (3) ① +1.5 ② -6.5 ③ +9.5 ④ -5.5

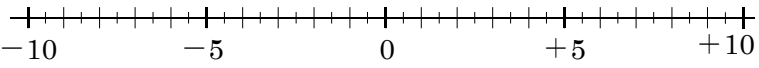


問題2 次の数に対応する点を下の数直線上に矢印で表せ。

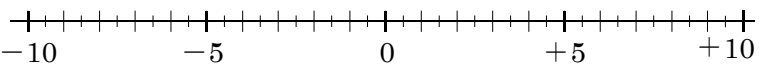
- (1) ① +7 ② -8.5 ③ +4.5 ④ -1.5



- (2) ① -6 ② -2.5 ③ +3.5 ④ +8.5

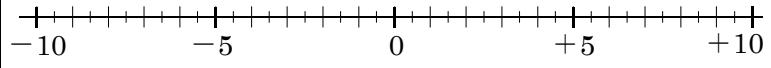


- (3) ① +5.5 ② -4.5 ③ +7.5 ④ -0.5

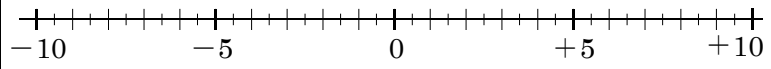


問題3 次の数に対応する点を下の数直線上に矢印で表せ。

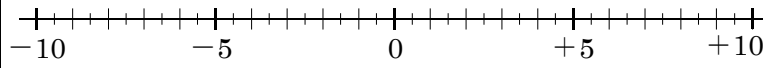
- (1) ① -7.5 ② +5.5 ③ -1.5 ④ +2.5



- (2) ① -6.5 ② -2.5 ③ +3.5 ④ +8.5

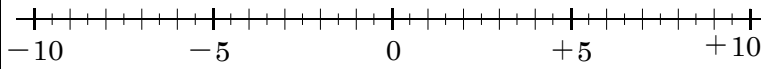


- (3) ① +3.5 ② -9.5 ③ +1.5 ④ -4.5

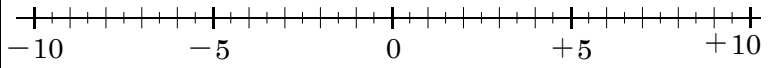


問題4 次の数に対応する点を下の数直線上に矢印で表せ。

- (1) ① +0.5 ② -4.5 ③ +8.5 ④ -5.5



- (2) ① -1.5 ② +9 ③ -7 ④ +4.5



- (3) ① -5.5 ② +6.5 ③ -3.5 ④ +8.5

