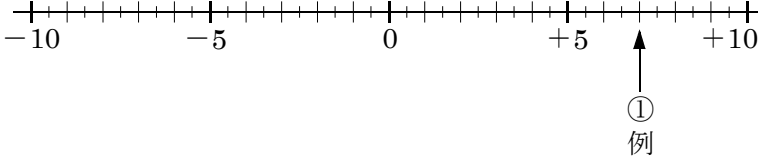


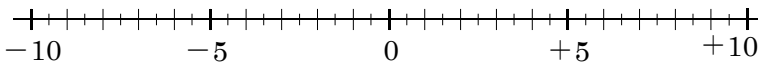
開始日 /	終了日 /	解説 NO1	中 1	正負の数 NO1 B		NAME	MISS

問題1 次の数に対応する点を下の数直線上に矢印で表せ。

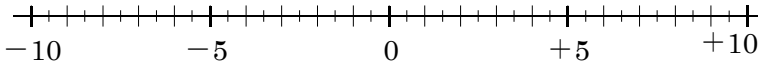
- (1) ① +7    ② -1.5    ③ +2    ④ -7.5



- (2) ① -6    ② -4.5    ③ +0.5    ④ +8.5

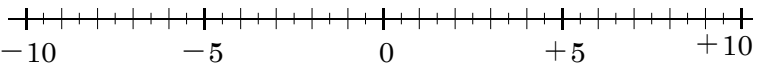


- (3) ① +3.5    ② -2.5    ③ +6.5    ④ -0.5

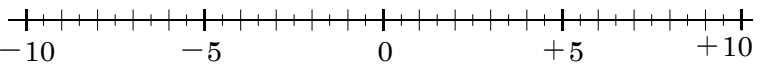


問題2 次の数に対応する点を下の数直線上に矢印で表せ。

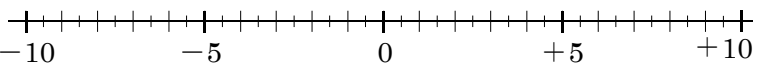
- (1) ① +5.5    ② -7.5    ③ +3    ④ -3.5



- (2) ① -9    ② -1    ③ +1.5    ④ +7.5

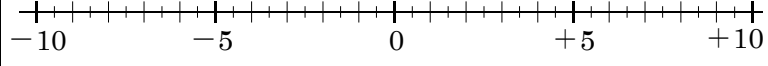


- (3) ① +2.5    ② -6.5    ③ +4.5    ④ -8.5

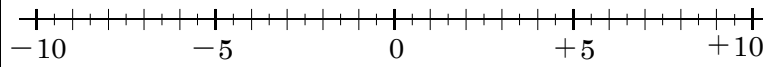


問題3 次の数に対応する点を下の数直線上に矢印で表せ。

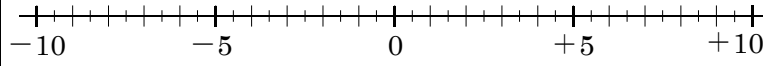
- (1) ① -6    ② +2.5    ③ -8.5    ④ +3.5



- (2) ① -0.5    ② -7    ③ +4.5    ④ +7.5

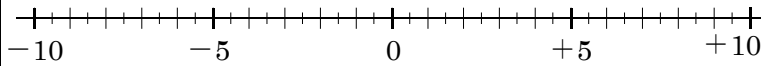


- (3) ① +0.5    ② -5.5    ③ +9.5    ④ -1

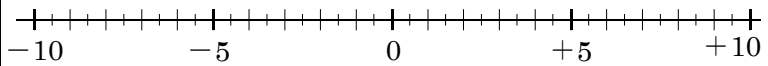


問題4 次の数に対応する点を下の数直線上に矢印で表せ。

- (1) ① +1.5    ② -6.5    ③ +1    ④ -8



- (2) ① -7.5    ② +3.5    ③ -4.5    ④ +6



- (3) ① -0.5    ② +5.5    ③ -9.5    ④ +2.5

