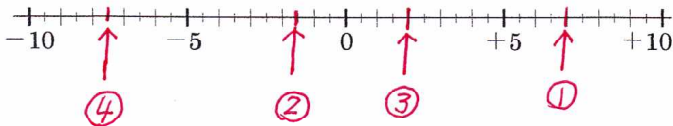


名前	解説	中 1	正負の数 NO2			%	正解	月
	NO1		数直線の読み方①					

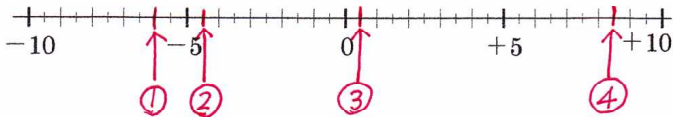
数直線の読み方①

問題1 次の数に対応する点を、下の数直線上に表せ。

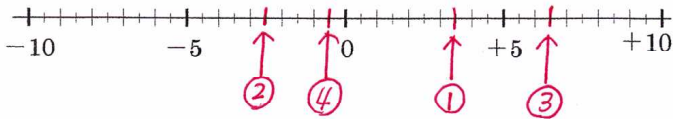
- (1) ① +7 ② -1.5 ③ +2 ④ -7.5



- (2) ① -6 ② -4.5 ③ +0.5 ④ +8.5




- (3) ① +3.5 ② -2.5 ③ +6.5 ④ -0.5

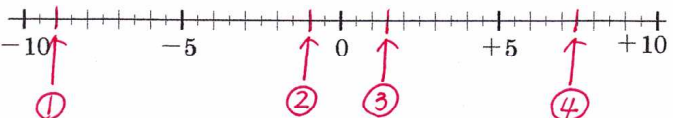


問題2 次の数に対応する点を、下の数直線上に表せ。


- (1) ① +5.5 ② -7.5 ③ +3 ④ -3.5



- (2) ① -9 ② -1 ③ +1.5 ④ +7.5

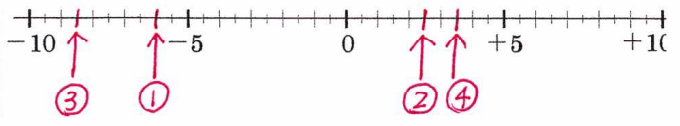


- (3) ① +2.5 ② -6.5 ③ +4.5 ④ -8.5

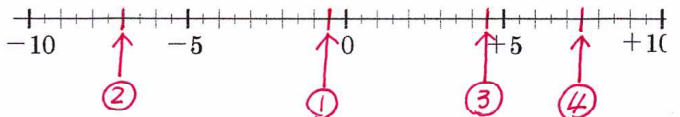


問題3 次の数に対応する点を、下の数直線上に表せ。

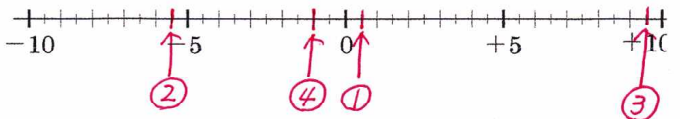
- (1) ① -6 ② +2.5 ③ -8.5 ④ +3.5



- (2) ① -0.5 ② -7 ③ +4.5 ④ +7.5

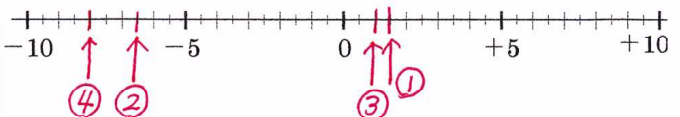


- (3) ① +0.5 ② -5.5 ③ +9.5 ④ -1

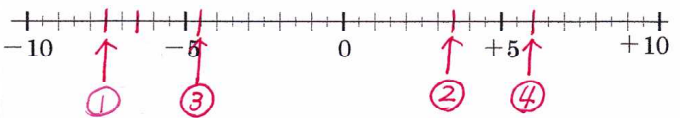


問題4 次の数に対応する点を、下の数直線上に表せ。

- (1) ① +1.5 ② -6.5 ③ +1 ④ -8



- (2) ① -7.5 ② +3.5 ③ -4.5 ④ +6



- (3) ① -0.5 ② +5.5 ③ -9.5 ④ +2.5

