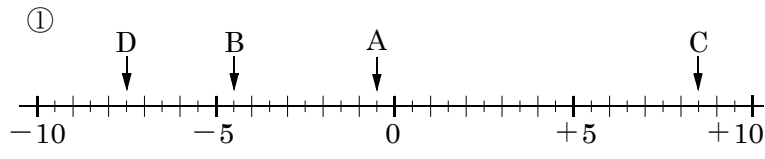
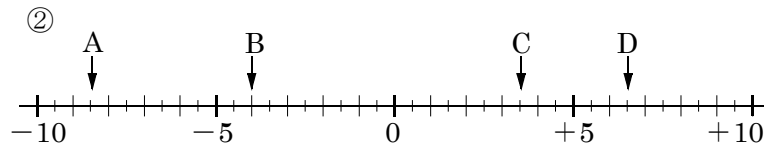


開始日 /	終了日 /	解説 NO1	中 1	正負の数 NO1		NAME	MISS

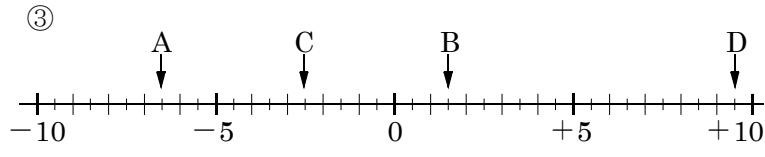
問題1 次の数直線で点A,B,C,Dに対応する数を書け。



A B C D

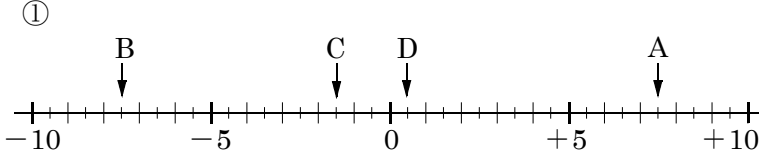


A B C D

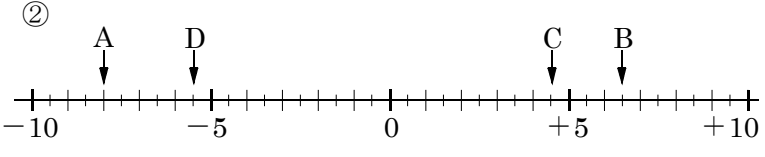


A B C D

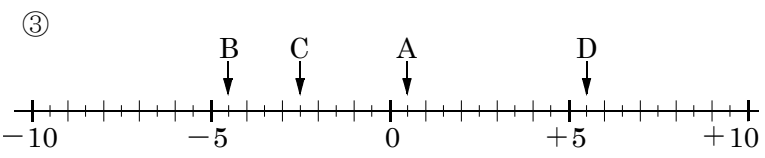
問題2 次の数直線で点A,B,C,Dに対応する数を書け。



A B C D

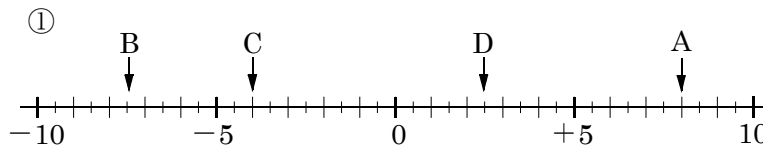


A B C D

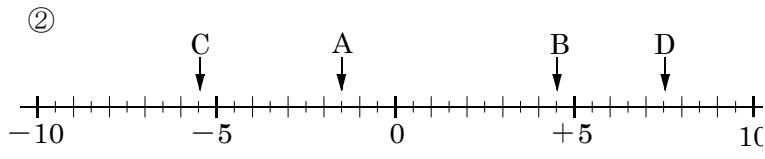


A B C D

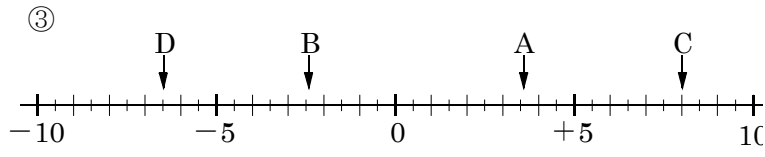
問題3 次の数直線で点A,B,C,Dに対応する数を書け。



A B C D

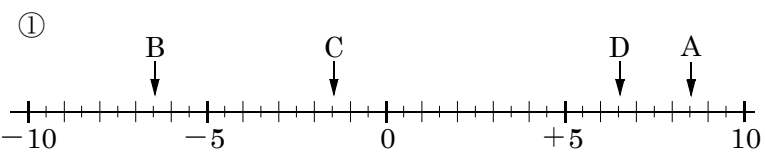


A B C D

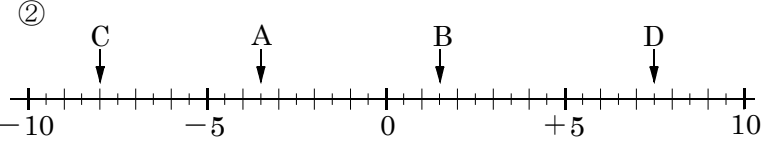


A B C D

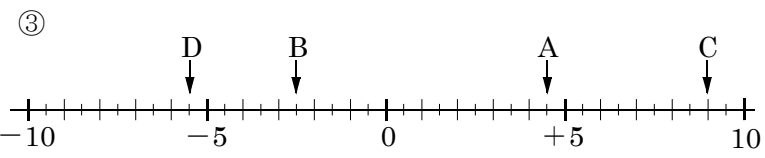
問題4 次の数直線で点A,B,C,Dに対応する数を書け。



A B C D



A B C D



A B C D